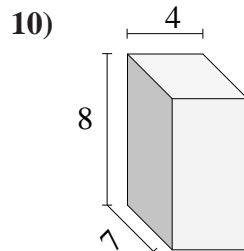
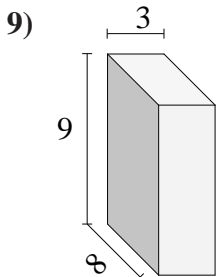
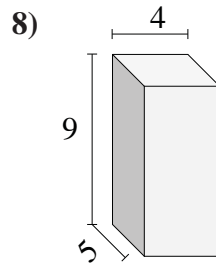
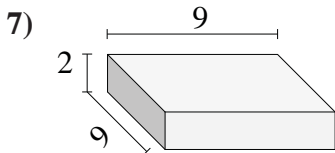
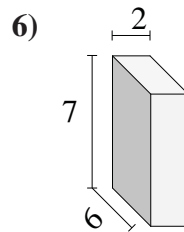
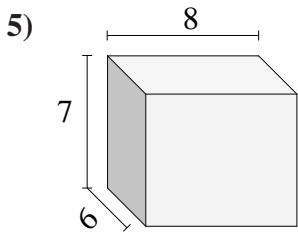
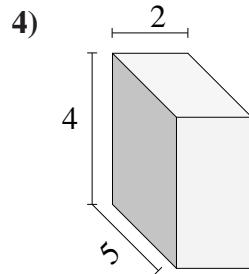
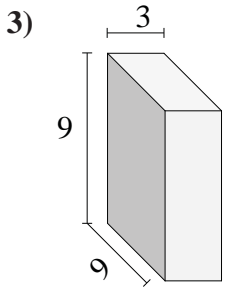
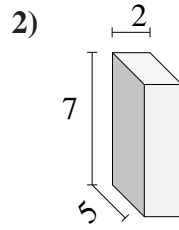
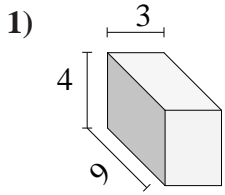




Find the volume of each of the rectangular prisms.

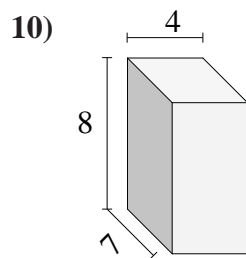
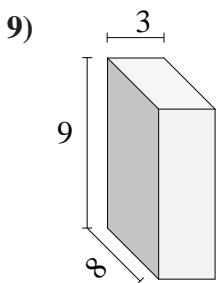
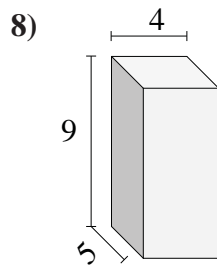
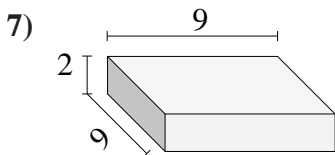
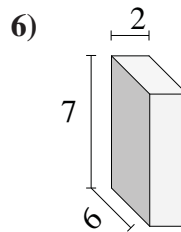
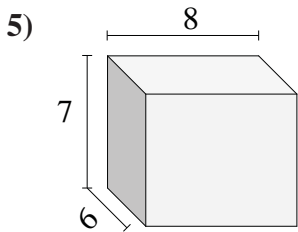
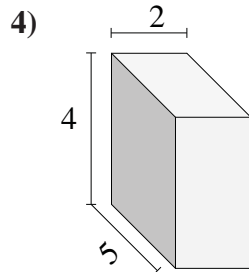
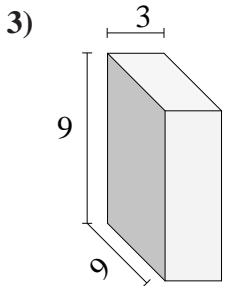
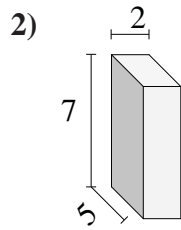
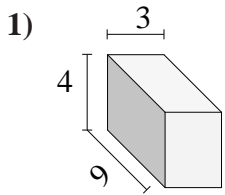


Answers

- 1. \_\_\_\_\_
- 2. \_\_\_\_\_
- 3. \_\_\_\_\_
- 4. \_\_\_\_\_
- 5. \_\_\_\_\_
- 6. \_\_\_\_\_
- 7. \_\_\_\_\_
- 8. \_\_\_\_\_
- 9. \_\_\_\_\_
- 10. \_\_\_\_\_



Find the volume of each of the rectangular prisms.



Answers

- 1. 108
- 2. 70
- 3. 243
- 4. 40
- 5. 336
- 6. 84
- 7. 162
- 8. 180
- 9. 216
- 10. 224