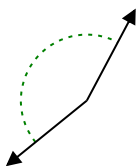


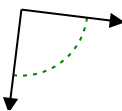


Determine if the angle shown is acute, obtuse, right or straight.

Ex)



1)



2)



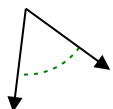
Answers

Ex. obtuse

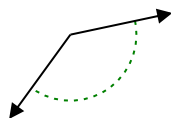
1. _____

2. _____

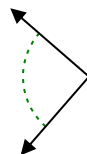
3)



4)



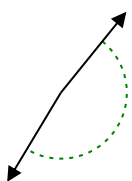
5)



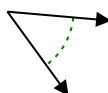
3. _____

4. _____

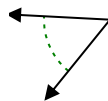
6)



7)



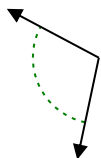
8)



5. _____

6. _____

9)



10)



11)



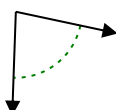
7. _____

8. _____

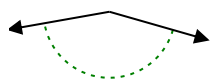
9. _____

10. _____

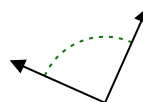
12)



13)



14)

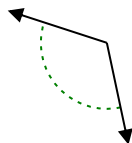


11. _____

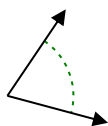
12. _____

13. _____

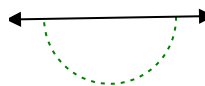
15)



16)



17)



14. _____

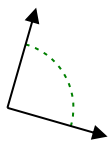
15. _____

16. _____

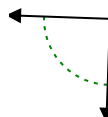
18)



19)



20)



17. _____

18. _____

19. _____

20. _____